


MCQs

TOPICWISE SOLVED QUESTIONS




MECHANICAL ENGINEERING

Usefull for
ESE/GATE/PSUs/AE/JE



E info@engineersacademy.org **W** www.engineersacademy.org

National Board Helpline Number : + 91 809 444 1 777



Publisher and Distributor

Engineers Academy Publications

100-102, Ram Nagar, Bambala Puliya, Toll Tax,
Tonk Road, Pratap Nagar, Jaipur (Rajasthan)-302033
E-Mail : engineers.academy.india@gmail.com

All Rights Reserved :

This book or part there of cannot be translated or reproduced in any form (except for review or criticism) without the written permission from the Publishers.

ISBN : "978-93-89149-22-7"

First Edition : 2013

Second Edition : 2014

Third Edition : 2015

Fourth Edition : 2016

Fifth Edition : 2017

Sixth Edition : 2018

Seventh Edition: 2020

Without prior written permission of publisher and author, no person/publisher/institute should use full part of the text/design/question/material of the book. If any body/publisher/institute is found in default legal action will be taken accordingly.

Price : ₹ 1000.00

Although every effort has been made to avoid mistakes and omissions, there may be possibility some mistakes been left inadvertently. This book is released with the understanding that neither author nor publisher will be responsible in any manner for mistakes/omissions in the book. Dispute, if any, shall be subject to Jaipur (Rajasthan) Jurisdiction only.



DIRECTOR'S MESSAGE



To reach heights one must start climbing and if the journey is difficult then perseverance is the key to success. As a teacher we have realized over past years that success in any competitive exam requires hard work and proper guidance. Engineers Academy with its unique teaching methodologies has always proved that we meet the expectations of thousands of students and parents to make their dreams come true. With changing patterns, we have adapted ourselves to deliver the best and ensure better results.

This book has been organized and executed with a lot of care, dedication and passion for lucidity. A conscious attempt has been made to simplify the concepts to facilitate better understanding of the subject.

Engineers Academy has many successful stories of students who secured All India Rank in ESE, GATE, PSUs, SSC-JEn, RRB JEn and other competitive examination. Now we invite you to become a part of Engineers Academy to explore and achieve ultimate goal of your life. We promise to provide you quality guidance with competitive environment which is far advanced and ahead than the reach of other institution.

We would feel satisfied if the book meets the needs of the students for whom it is meant.

Lastly, we are thankful to all the engineers, authors whose work has been the source of enlightenment, inspiration and guidance in presenting this book.

It is hoped that the book in its new form will enjoy its ever increasing popularity.

Pankaj Kumar Goyal
Founder-Engineers Academy

Mahendra Choudhary
Founder-Engineers Academy

PREFACE

This book has been written to meet the growing requirements of candidates appearing for SSC-JE, RRB-JE, State-AE/JE, DRDO, ISRO, BARC, ECIL and Public Sector Engineering Examinations. Though every candidate has ability to succeed but competitive environment, in-depth knowledge, quality guidance, time management and good source of study is required to achieve goals.

This book includes Multiple Choice Questions (MCQ) which works as a mock exam practice for the reader. Questions of all the subject have been organized in systematic, concepts oriented and error less manner so that it become easy and interesting for even a beginner to understand. It is a very convenient book and must be solved by candidate aiming for competitive exams.

After solving this booklet students can feel encouraged and develop confidence to attempt each and every type of numerical as well as theoretical problems. Each problems explains solving approach so that at the end, so the reader is well equipped to be able to apply any type of problem solving requirement and distinctly choose one strategy or type from the other.

We hope this book will be proved an important tool to succeed in SSC-JE, RRB-JE, State-AE/JE, UPSSSC-AE/JE, UPPCL-AE/JE, TNPSC-AE, FCI, DMRC, LMRC, HPSC-AE, DSSSB-JE, DDA-JE, DRDO, ISRO, BARC, ECIL and Public Sector Engineering Examinations.

It is earnestly hoped that with the extensive additions and revisions, the present edition will facilitate the students not only in preparing themselves for competitive examinations but also in preparing for their regular examinations and prove more useful to the students than the earlier editions.

Even though, enough readings were given for correcting the error and printing mistakes, due to human tendency there could be some minor typos in the book. If any such typos found, they will be highly appreciated and in corporated in the next edition. Also, please provide your valuable suggestions at : engineers.academy.india@gmail.com

Wish you all the best. Have a nice reading.

– Team of
Engineers Academy Publications

CONTENTS

S.No.	TOPIC	PAGE No.
1.	STRENGTH OF MATERIALS	01 – 90
2.	MACHINE DESIGN	91 – 148
3.	FLUID MECHANICS	149 – 262
4.	THEORY OF MACHINE	263 – 330
5.	THERMODYNAMICS	331 – 376
6.	REFRIGERATION & AIR CONDITIONING	377 – 420
7.	INTERNAL COMBUSTION ENGINE	421 – 454
8.	POWER PLANT	455 – 494
9.	HEAT & MASS TRANSFER	495 – 550
10.	PRODUCTION ENGINEERING	551 – 668
11.	INDUSTRIAL ENGINEERING	669 – 702

UNIT-I

STRENGTH OF MATERIALS

1.	Introduction	03 – 14
2.	Axially Loaded Members	15 – 23
3.	Shear Force and Bending Moment	24 – 34
4.	Stresses in Beams	35 – 49
5.	Analysis of Stress and Strain	50 – 60
6.	Torsion of Shafts	61 – 68
7.	Deflection Beams	69 – 74
8.	Theories of Failure	75 – 77
9.	Columns & Springs	78 – 85
10.	Thin and Thick Cylinders	86 – 90




ENGINEERS ACADEMY®

Your GATEway to Professional Excellence

IES • GATE • PSUs • JTO • IAS • NET

www.eapublications.org

NOTES



INTRODUCTION

CHAPTER**1****OBJECTIVE QUESTIONS**

1. Actual rupture stress is
 - (a) Breaking stress
 - (b) Maximum load/original cross-sectional area
 - (c) Load at breaking point/true strain
 - (d) Load at breaking point/neck area
2. Elasticity of various materials is controlled by its
 - (a) Ultimate tensile stress
 - (b) Proof stress
 - (c) Stress at yield point
 - (d) Stress at elastic limit
3. Ratio of lateral strain to linear strain within elastic limit, is known as
 - (a) Young's modulus
 - (b) Bulk modulus
 - (c) Modulus of rigidity
 - (d) Poisson's ratio
4. Ratio of direct stress to volumetric strain in case of a body subjected to three mutually perpendicular stress of equal intensity, is
 - (a) Young's modulus
 - (b) Bulk modulus
 - (c) Modulus of rigidity
 - (d) None of the above
5. If a material expands freely due to heating it will develop
 - (a) Thermal stresses
 - (b) Tensile stress
 - (c) No stress
 - (d) Bending
6. In a tensile test, near the elastic limit zone,
 - (a) Tensile strain increases more quickly
 - (b) Tensile strain decreases more quickly
 - (c) Tensile strain increases in proportion to the stress
 - (d) Tensile strain decreases in proportion to the stress
7. The property of a material by virtue of which it can be beaten or rolled into plates is called
 - (a) Malleability
 - (b) Ductility
 - (c) Plasticity
 - (d) Elasticity
8. Change in the unit volume of a material under tension with increase in its Poisson's ratio will
 - (a) Increase
 - (b) Decrease
 - (c) Remain same
 - (d) Unpredictable
9. The phenomenon of slow extension of the material, i.e. stress increasing with the time at a constant load is called
 - (a) Creeping
 - (b) Yielding
 - (c) Breaking
 - (d) Plasticity
10. For steel, the ultimate strength in shear as compared to in tension is nearly
 - (a) same
 - (b) half
 - (c) one-third
 - (d) two-third

11. Tensile strength of a material is obtained by dividing the maximum load during the test by the
- Area at the time of fracture
 - Original cross-sectional area
 - Average of (a) and (b)
 - Minimum area after fracture
12. Maximum elastic strain energy that can be stored in a body is known as
- Impact energy
 - Resilience
 - Proof resilience
 - None of the above
13. Proof stress
- Is the safest stress
 - Causes a specified permanent deformation in a material, usually 0.1%-0.2%
 - Is used in connection with materials like mild steel
 - Does not exist
14. A material having same properties in all directions at a given point is known as
- Orthotropic material
 - Isotropic material
 - Elastic material
 - Homogenous material
15. The Bulk modulus K , the modulus of rigidity N and Poisson's ratio $1/m$ are related by
- $\frac{1}{m} = \frac{9KN}{3K + N}$
 - $\frac{1}{m} = \frac{3K - 2N}{2N + 6K}$
 - $\frac{1}{m} = \frac{6K + 2N}{3K - 2N}$
 - None of the above
16. The stress at which extension of the material takes place more quickly as compared to the increase in load is called
- Elastic point of the material
 - Plastic point of the material
 - Breaking point of the material
 - Yielding point of the material
17. When it is indicated that member is elastic, it means that when force is applied, it will
- Not deform
 - Be safest
 - Stretch
 - Not stretch
18. A material capable of absorbing large amount of energy before fracture is known as
- ductility
 - toughness
 - resilience
 - shock proof
19. If the thickness and width of each plate of a laminated spring be t and w respectively, then its moment of inertia is equal to
- $\frac{wt^3}{12}$
 - $\frac{t^2w^3}{12}$
 - $\frac{wt^2}{12}$
 - $\frac{tw^2}{12}$
20. During a tensile test on a specimen of 1cm^2 cross-section, maximum load observed was 8 tonnes and area of cross-section at neck was 0.5cm^2 . Ultimate tensile strength of specimen is
- 4 tonnes/ cm^2
 - 8 tonnes/ cm^2
 - 16 tonnes/ cm^2
 - 22 tonnes/ cm^2
21. A material obey's hooke's law up to
- Plastic limit
 - Elastic limit
 - Yield point
 - Limit of proportionality
22. True stress-strain curve for materials is plotted between
- Load/original cross-sectional area and change in length/original length
 - Load/instantaneous cross-sectional area and $\log_e \left(\frac{\text{Original area}}{\text{Instantaneous area}} \right)$
 - Load/instantaneous cross-sectional area and change in length/original length
 - Load/instantaneous area and instantaneous area/original area

23. The intensity of stress which causes unit longitudinal is called
- (a) Unit stress
 - (b) Modulus of rigidity
 - (c) Bulk modulus
 - (d) Modulus of elasticity
24. Modulus of rigidity is defined as the ratio of
- (a) Longitudinal stress and longitudinal strain
 - (b) Volumetric stress and volumetric strain
 - (c) Lateral stress and lateral strain
 - (d) Shear stress and shear strain
25. The ultimate tensile stress of mild steel compared to ultimate compressive stress is
- (a) Same
 - (b) More
 - (c) Less
 - (d) Unpredictable
26. Modular ratio of two materials is the ratio of
- (a) Strains
 - (b) Stress and strain
 - (c) Shear stress and shear strain
 - (d) Moduli of elasticity
27. Elasticity of a M.S. specimen is defined by
- (a) Hooke's law
 - (b) Yield point
 - (c) Plastic flow
 - (d) Proof stress
28. If a material is loaded beyond yield point stress
- (a) It becomes elastic
 - (b) It becomes ductile
 - (c) Its resistance to fatigue increases
 - (d) It loses its tendency to return to its original shape
29. A cylindrical section having no joint is known as
- (a) Jointless section
 - (b) Homogeneous section
 - (c) Perfect section
 - (d) Seamless section
30. The bulk modulus of a material is defined as the ratio of
- (a) Volume change to modulus of elasticity
 - (b) Stress intensity to volumetric strain
 - (c) Volume change to original volume
 - (d) Pressure applied to the change in volume
31. During the tensile test of a glass rod the nature of stress-strain curve is
- (a) Straight and dropping
 - (b) Sudden break
 - (c) Straight line
 - (d) Parabolic
32. Modulus of resilience is
- (a) Property to resist shocks
 - (b) The property to store energy without undergoing permanent deformation
 - (c) An index of elasticity
 - (d) An index of compressibility
33. Moment of inertia of a square of side d about the diagonal is
- (a) $\frac{d^4}{12}$
 - (b) $\frac{d^4}{24}$
 - (c) $\frac{d^4}{18}$
 - (d) $\frac{d^4}{8}$
34. Disruptive strength is the maximum strength of a metal.
- (a) When subjected to three principal tensile stresses at right angles to one another and all of equal magnitude.
 - (b) When loaded in tension
 - (c) When loaded in compression
 - (d) When loaded in shear
35. Radius of gyration for a circular section is
- (a) Directly proportional to the diameter of the section
 - (b) Square root of the diameter of the section
 - (c) Inversely proportional to the diameter of the section
 - (d) None of the above
36. Strain energy stored in a body of volume V with stress due to gradually applied load is
- (a) $\frac{\sigma E}{V}$
 - (b) $\frac{\sigma E^2}{V}$
 - (c) $\frac{\sigma V^2}{E}$
 - (d) $\frac{\sigma^2 V}{2E}$

37. A non-yielding support implies that the
 (a) Support is frictionless
 (b) Support can take any amount of reaction
 (c) Support holds member firmly
 (d) Slope of the beam at the support is zero
38. Material which exhibit the same elastic properties in given direction at all point is called
 (a) Homogeneous (b) Inelastic
 (c) Isotropic (d) Isentropic
39. Most elastic material is
 (a) Rubber (b) Plastic
 (c) Brass (d) Steel
40. The value of modulus of elasticity for mild steel is of the order of
 (a) $2.1 \times 10^8 \text{ kg/cm}^2$
 (b) $2.1 \times 10^6 \text{ kg/cm}^2$
 (c) $2.1 \times 10^7 \text{ kg/cm}^2$
 (d) $0.1 \times 10^6 \text{ kg/cm}^2$
41. Compound beams are those in which
 (a) Reaction components are more than three
 (b) Reaction components are three
 (c) Reaction components are more than three but for each additional reaction components, one hinge is introduced.
 (d) None of the above
42. Condition to determine the reactions of each support of beam is
 (a) Algebraic sum of all vertical forces is zero
 (b) Algebraic sum of all horizontal forces is zero
 (c) Algebraic sum of all moments about any point is zero
 (d) All of the above
43. Number of independent elastic constant for an isotropic, homogeneous and elastic material obeying hooke's law is
 (a) 1 (b) 2
 (c) 5 (d) 6
44. The capacity of a material to undergo deformation under tension without rupture is
 (a) Mechanical strength
 (b) Stiffness
 (c) Toughness
 (d) Ductility
45. Slow and progressive deformation of a material with time under constant stress is called
 (a) Creep (b) Erosion
 (c) Resilience (d) Fatigue
46. The resistance to fatigue of a material is measured by
 (a) Elastic limit
 (b) Young's modulus
 (c) Ultimate tensile strength
 (d) Endurance limit
47. A body having same properties throughout its volume is said to be
 (a) Isotropic (b) Continuous
 (c) Homogeneous (d) Uniform
48. Lateral strain (ϵ') can be expressed as
 (a) $\frac{\delta l}{l}$ (b) $\frac{l}{\delta l}$
 (c) $\mu\epsilon$ (d) $-\mu\epsilon$
49. The ratio of modulus of rigidity to modulus of elasticity of a material for a Poisson's ratio of 0.25 would be
 (a) 0.5 (b) 0.4
 (c) 0.3 (d) 0.1

[NTPC-DIP - Trainee]

[NTPC-DIP - Trainee]

[NTPC-DIP - Trainee]

[NTPC-DIP - Trainee]

[CEMPM - 2018]

[NTPC-DIP - Trainee]

50. When mechanical properties of a material remain same in a particular direction at each point, such a material is called
(a) Isotropic (b) Homogeneous
(c) Orthotropic (d) Anisotropic
[NTPC-DIP - Trainee]
51. The centre of gravity of a plane lamina is not at its geometrical centre, if it is a
(a) Circle (b) Square
(c) Rectangle (d) Right-angled triangle
[NTPC-DIP - Trainee]
52. Which of the following properties of mild steel cannot be determined by a static tensile test of the sample?
(a) Ultimate tensile strength
(b) Ultimate shear strength
(c) Ductility
(d) Poisson's ratio
[NTPC-DIP - Trainee]
53. Stress relaxation is the phenomenon
(a) In which stress remains constant on increasing load
(b) Stress reduced on increasing load
(c) In which deformation tends to loosen the joint and produces a reduced stress
(d) In which parts are not loaded
54. The maximum stress a material can stand before it breaks is called the
(a) Working stress
(b) Ultimate stress
(c) Compressive stress
(d) Transverse stress
55. The value of Poisson's ratio for steel is between the range of
(a) 0.4 to 0.6
(b) 0.21 to 0.24
(c) 0.01 to 0.2
(d) 0.25 to 0.33
56. The relation between modulus of elasticity (E) and bulk modulus (k) is
(a) $E = 3k(1-2\text{Poisson's ratio})$
(b) $E=3k(1+\text{Poisson's ratio})$
(c) $E = 3k (1+2\text{Poisson's ratio})$
(d) $E = 3k(1-\text{Poisson's ratio})$
57. For a linearly elastic, isotropic and homogeneous material, the number of elastic constants required to relate stress and strain is
(a) Two (b) Three
(c) Four (d) Six
[TSPSC - AE]
58. Young's modulus of elasticity and Poisson's ratio of a material are 1.25×10^5 MPa and 0.34 respectively. The modulus of rigidity of the material will be
(a) 0.4025×10^5 MPa
(b) 0.4664×10^5 MPa
(c) 0.8375×10^5 MPa
(d) 0.9469×10^5 MPa
[TSPSC - AE]
59. If a material has a modulus of elasticity of 2×10^6 kg/cm² and a modulus of rigidity of 0.8×10^6 kg/cm², then the approximate value of the Poisson's ratio of the material will be
(a) 0.25 (b) 0.31
(c) 0.45 (d) 0.20
[TSPSC - AE]
60. During tensile testing of a specimen using Universal Testing Machine, the parameters actually measured include
(a) True strain and true stress
(b) Young's modulus and Poisson's ratio
(c) Engineering stress and engineering strain
(d) Load and elongation
[TSPSC - AE]

61. The young's modulus of a material is 125 GPa and Poisson's ratio is 0.25. The modulus of rigidity of the material is
 (a) 50 GPa (b) 30 GPa
 (c) 5 GPa (d) 500 GPa
62. In a tensile test, when a material is stressed beyond elastic limit, the tensile strain _____ as compared to the stress.
 (a) Decreases slowly
 (b) Increases slowly
 (c) Decreases more quickly
 (d) Increases more quickly
63. The property which enables metals to be drawn into wire is
 (a) Ductility
 (b) Malleability
 (c) Plastic deformation
 (d) Elastic deformation
- [CEMPM - 2018]**
64. Proof resilience is the greatest stored energy at
 (a) Limit of proportionality
 (b) Elastic limit
 (c) Plastic limit
 (d) None of these
- [NTPC-DIP - ME]**
65. The ratio of modulus of elasticity (E) to modulus of rigidity (G) in terms of Poisson's ratio (μ) (in case of the elastic materials) is-
 (a) $2(1 - \mu)$ (b) $2(1 + \mu)$
 (c) $3(1 - 2\mu)$ (d) $0.5(1 - \mu)$
- [QP-Mechanical - I]**
66. The property of a material to absorb energy within elastic limits is known as
 (a) Elasticity (b) Toughness
 (c) Tensile strength (d) Resilience
- [QP-Mechanical - I]**
67. Strain energy stored in a solid circular shaft is proportional to
 (a) GJ(torsional rigidity)
 (b) $1/(GJ)^2$
 (c) (GJ)
 (d) $1/(GJ)$
- [QP-Mechanical - I]**
68. Isotropic materials are those which have the
 (a) Different stresses induced in all directions
 (b) Different thermal properties in all directions
 (c) Same elastic property in all directions at a given point
 (d) Different density throughout
- [AEM]**
69. The impact strength of a material is directly related to
 (a) Tensile strength (b) Hardness
 (c) Fatigue strength (d) Toughness
- [AEM]**
70. The linear relation between the stress and strain of a material is valid until
 (a) Fracture stress (b) Elastic limit
 (c) Ultimate stress (d) Proportional limit
- [DRDO 2008]**
71. In compression test, the cast iron specimen would :
 (a) Would not fracture
 (b) Fracture along at right angles to the axis of specimen
 (c) Fracture along an oblique plane
 (d) Fracture along the axis of load
- [NMRC-JE-ME - 2017]**

72. Moment of Inertia of the rectangle of base 80 mm and height 10 mm about its centroidal (I_{xx}) axis
- (a) $6666.66 \text{ mm}^4 = I_{xx}$
 (b) $5827.21 \text{ mm}^4 = I_{xx}$
 (c) $7777.22 \text{ mm}^4 = I_{xx}$
 (d) $6826.11 \text{ mm}^4 = I_{xx}$
- [MPE - 2014]**
73. The ultimate tensile strength of low carbon steel by working at high strain rate will
- (a) Increase
 (b) Decrease
 (c) Remain constant
 (d) First increase, then decrease
74. A metallic cube is subjected to equal pressure (P) on its all the six faces, If ϵ is volumetric strain produced, the ratio $\frac{P}{\epsilon}$ is called
- (a) Elastic modulus
 (b) Shear modulus
 (c) Bulk modulus
 (d) Strain-Energy per unit volume
75. The relation among the elastic constants E, G and K is
- (a) $E = \frac{KG}{9K+G}$ (b) $E = \frac{9KG}{K+G}$
 (c) $\frac{9KG}{K+3G}$ (d) $E = \frac{9KG}{3K+G}$
76. What does the elasticity of material enables it to do?
- (a) Regain the original shape after the removal of applied load
 (b) Draw into wires by the application of force
 (c) Resist fracture due to high impact
 (d) Retain deformation produced under load permanently
77. The ratio of the moment of inertia of a rectangle about its centroidal axis to that about its base, is
- (a) $1/3$ (b) $1/4$
 (c) $3/4$ (d) 4
78. Centre of gravity of a right circular cone of base radius r and height h from the base is :
- (a) $\frac{3}{4}h$ (b) $\frac{1}{4}h$
 (c) $\frac{3}{8}h$ (d) $\frac{1}{8}h$
79. $\sigma \propto \epsilon$. This rule is known as
- (a) Castiglo's theorem
 (b) Hooke's law
 (c) Young's theorem
 (d) Reynold law
- [CEMPM - 2018]**
80. The equation for relationship between E, G & K is
- (a) $\frac{1}{E} = \frac{9}{k} + \frac{3}{G}$ (b) $\frac{3}{E} = \frac{9}{k} + \frac{1}{G}$
 (c) $\frac{9}{E} = \frac{3}{k} + \frac{1}{G}$ (d) $\frac{9}{E} = \frac{3}{G} + \frac{1}{k}$
81. In various geometry of the product, stress concentration factor depends on which of the following condition?
- (a) Variation of geometrical cross section of the part
 (b) Quality of the part
 (c) Uniform geometrical cross section of the part
 (d) None of these
82. Factor of safety is the ratio of
- (a) Breaking stress to working stress
 (b) Endurance limit to yield stress
 (c) Elastic limit to ultimate stress
 (d) Failure stress to working stress

83. For a ductile material, toughness is a measure of:
- Resistance to scratching
 - Ability to absorb energy upto fracture
 - Ability to absorb energy till elastic limit
 - Resistance to indentation
84. The load per instantaneous cross sectional area is called.....
- Ture stress
 - Shear stress
 - Normal stress
 - Nominal stress
85. The body which is capable of transmitting forces with negligible deformation is known as.....
- Resistant body
 - Flexible body
 - Reductant body
 - Rigid body
86. The value of stress corresponding to force on whose removal deformation disappears is known as.....
- Fracture
 - Proportionality limit
 - Yield point
 - Elastic limit
87. What is the ability of a material to with stand bending without fracture known as?
- Mechanical strength
 - Stiffness
 - Toughness
 - Ductility
88. Poisson's ratio for aluminium is:
- 0.13
 - 0.23
 - 0.33
 - 0.43
89. Strain developed perpendicular to the direction of force applied is:
- Linear strain
 - Volumetric strain
 - Shear strain
 - Lateral strain
90. Toughness indicates of a material.
- Impact strength
 - Fatigue strength
 - Tensile strength
 - Shear strength
91. The fatigue life of a part can be improved by
- Electroplating
 - Polishing
 - Coating
 - Shot peening
92. Necking phenomenon in stress-strain is observed for
- Brittle materials
 - Ductile materials
 - Both brittle as well as ductile materials
 - None of the above
93. What strength is to be considered for ductile material under cyclic load?
- Ultimate strength
 - Yield strength
 - Endurance strength
 - Fracture strength
94. Ability of a material to exhibit considerable elastic recovery on release of load, is known as
- Toughness
 - Stiffness
 - Resilience
 - Hardness
95. Thermal expansion of a solid is employed in :-
- Thermocouple
 - Resistance thermometer
 - Bulb temperature
 - Bimetal element
96. Which of the following material has non-linear elastic behaviour
- Mild steel
 - Aluminium
 - Cast iron
 - Rubber
97. For a given material, the modulus of rigidity is 100 GPa and Poisson's ratio is 0.25 the value of modulus of elasticity is GPa is
- 125
 - 150
 - 200
 - 250
98. The modulus of elasticity for a material is 200 GN/m² and Poisson's ratio is 0.25 what is the modulus of rigidity?
- 80 GN/M²
 - 125 GN/m²
 - 250 GN/m²
 - 320 GN/m²

99. When mild steel is subjected to a tensile load, its fracture will conform to-
- Star shapes
 - Granular shape
 - Cup and cone shape
 - Fibrous shape
100. The fracture in cast iron occur due to compression (direction of load) test along its
- Load
 - Perpendicular to axis of load
 - Oblique plane
 - None of above
101. In stress-strain curve, value of stress at yield point is _____ than value at fatigue point:
- Lower
 - Higher
 - Same
 - Twice
102. The radius of wire stretched by a load is halved then its young's modulus will be-
- Half
 - Unaffected
 - Doubled
 - Become four times
103. If the modulus of elasticity is zero, the material is said to be-
- Rigid
 - Elastic
 - Flexible
 - Plastic
104. Bending compressive and tensile stresses respectively are calculated based on
- Net area and gross area
 - Gross area and net area
 - Net area in both cases
 - Gross area in both cases
105. The unit of elastic modulus is the same as those of
- Stress, shear modulus and pressure
 - Strain, shear modulus and force
 - Shear modulus, stress and force
 - Stress, strain and pressure
106. The negative ratio of transverse to axial strain is called as :
- Young's modulus
 - Shear modulus
 - Poisson's ratio
 - Buld modulus of elasticity
107. What happens if a bar of length 'l' width 'b' and thickness 't' is subjected to a push of P ?
- Length, width and thickness increases
 - Length, width and thickness decreases
 - Length increases, width and thickness decreases
 - Length decreases, width and thickness increases
108. The bending of bimetallic strips during rise in temperature is due to difference in their:
- Coefficient of linear expansion
 - Thickness
 - Thermal Conductivities
 - Elastic properties
109. The moment of inertia of a square of side (a) about an axis passing through its center of gravity is
- $a^4/4$
 - $a^4/8$
 - $a^4/12$
 - $a^4/36$
110. In the case of perfect elastic collision, the coefficient of restitution is :
- 1.0
 - 0.5
 - Less than 1.0
 - Zero
111. Which of the following is the correct definition of modulus of resilience of a material?
- Strain energy
 - Strain energy per unit mass
 - Strain energy per unit volume
 - None of these
112. Shock absorber in vehicles is used for-
- Absorbing the shock energy
 - Dissipating the shock energy
 - Increasing the shock energy
 - Producing the shock energy

ANSWERS AND EXPLANATIONS

1. *Ans. (d)*
2. *Ans. (d)*
3. *Ans. (d)*
4. *Ans. (b)*
5. *Ans. (c)*
6. *Ans. (a)*
7. *Ans. (a)*
8. *Ans. (b)*

$$\frac{P}{\Delta V/V} = k = \frac{E}{3(1-2\mu)}$$

as $\mu \uparrow \rightarrow k \uparrow \rightarrow \Delta V \downarrow$

9. *Ans. (a)*
10. *Ans. (d)*
11. *Ans. (b)*
12. *Ans. (c)*
13. *Ans. (b)*
14. *Ans. (b)*
15. *Ans. (b)*
16. *Ans. (d)*
17. *Ans. (c)*
18. *Ans. (b)*
19. *Ans. (a)*
20. *Ans. (b)*

$$\begin{aligned} \sigma_{\text{ultimate}} &= \frac{\text{load}}{\text{original cross sectional area}} \\ &= \frac{8}{1} = 8 \text{ tonnes/cm} \end{aligned}$$

21. *Ans. (d)*
22. *Ans. (b)*
23. *Ans. (d)*

$$E = \frac{\sigma}{\varepsilon} \text{ when } \varepsilon = 1 \Rightarrow \sigma = E$$

24. *Ans. (d)*
25. *Ans. (b)*

26. *Ans. (d)*
27. *Ans. (c)*
28. *Ans. (d)*
29. *Ans. (d)*
30. *Ans. (b)*

$$K = \frac{P}{\Delta V/V} = \frac{\sigma}{\varepsilon_v}$$

31. *Ans. (b)*
32. *Ans. (b)*
33. *Ans. (a)*
34. *Ans. (a)*
35. *Ans. (a)*
36. *Ans. (d)*
37. *Ans. (d)*
38. *Ans. (a)*
39. *Ans. (d)*
40. *Ans. (b)*
41. *Ans. (b)*
42. *Ans. (d)*
43. *Ans. (b)*
44. *Ans. (c)*
45. *Ans. (a)*

46. *Ans. (d)*
47. *Ans. (c)*
48. *Ans. (d)*

$$\mu = - \left(\frac{\text{Lateral strain}}{\text{Longitudinal strain}} \right)$$

Lateral strain = $-\mu$ longitudinal strain

49. *Ans. (b)*
50. *Ans. (b)*
51. *Ans. (d)*
52. *Ans. (b)*

53. *Ans. (c)*

Stress relaxation is decrease in stress in response to same amount of strain

This is because structure is kept in strained condition for some finite interval of time

54. *Ans. (b)*

55. *Ans. (d)*

56. *Ans. (a)*

$$E = 3k (1 - 2\mu)$$

57. *Ans. (a)*

58. *Ans. (b)*

$$E = 2C(1 + \mu)$$

$$1.25 \times 10^{11} = 2C[1.34]$$

$$1.25 \times 10^{11} = 2.68 \times C$$

$$0.4664 \times 10^5 \text{ MPa} = C$$

59. *Ans. (a)*

$$E = 2 \times 10^6 \text{ kg/cm}^2$$

$$C = 0.8 \times 10^6 \text{ kg/cm}^2$$

$$E = 2C(1 + \mu)$$

$$2 \times 10^6 = 2 \times 0.8 \times 10^6 (1 + \mu)$$

$$\frac{2}{1.6} = 1 + \mu$$

$$1.25 = 1 + \mu$$

$$\mu = 0.25$$

60. *Ans. (d)*

61. *Ans. (a)*

$$E = 2C (1 + \mu)$$

$$125 = 2C [1.25]$$

$$125 = 2.50C$$

$$\frac{125}{2.50} = C$$

$$50 = C$$

62. *Ans. (d)*

63. *Ans. (a)*

64. *Ans. (b)*

Proof resilience : Energy stored upto elastic limit.

65. *Ans. (b)*

66. *Ans. (d)*

67. *Ans. (d)*

$$(\text{Strain energy})_{\text{shaft}} = \frac{1}{2} \times T \times \theta \quad \dots (i)$$

From torsion equation

$$\frac{T}{J} = \frac{\tau_s}{R} = \frac{G\theta}{l}$$

$$\theta = \frac{TL}{GJ}$$

From equation (i)

$$(\text{S.E})_{\text{shaft}} = \frac{1}{2} \times T \times \frac{TL}{GJ}$$

$$(\text{S.E})_{\text{shaft}} \propto \frac{1}{GJ}$$

68. *Ans. (c)*

Isotropic material = Same elastic property in all direction at a given point

69. *Ans. (d)*

70. *Ans. (d)*

71. *Ans. (c)*

C.I is brittle material and brittle material along have fracture along oblique plane.

72. *Ans. (a)*

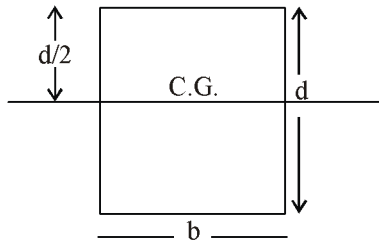
$$I_{xx} = \frac{bd^3}{12} = \frac{80 \times 10^3}{12} \\ = 6666.66 \text{ mm}^4$$

73. *Ans. (a)*

74. *Ans. (c)*

75. *Ans. (d)*

76. *Ans. (a)*

77. *Ans. (b)*

$$I_{\text{base}} = I_{\text{CG}} + Ay^2$$

$$= \frac{bd^3}{12} + (bd) \times \left(\frac{d}{2}\right)^2$$

$$= \frac{bd^3}{12} + \frac{bd \times d^2}{4}$$

$$= \frac{bd^3}{12} + \frac{bd^3}{4} = \frac{4bd^3}{12}$$

$$I_{\text{base}} = \frac{bd^3}{3}$$

$$\frac{I_{\text{C.G.}}}{I_{\text{base}}} = \frac{bd^3 \times 3}{12 \times bd^3}$$

$$\frac{I_{\text{C.G.}}}{I_{\text{base}}} = \frac{1}{4}$$

78. *Ans. (d)*79. *Ans. (b)*80. *Ans. (d)*81. *Ans. (a)*82. *Ans. (d)*83. *Ans. (b)*84. *Ans. (a)*85. *Ans. (a)*86. *Ans. (b)*87. *Ans. (b)*88. *Ans. (c)*89. *Ans. (d)*90. *Ans. (a)*91. *Ans. (d)*92. *Ans. (b)*93. *Ans. (c)*94. *Ans. (b)*95. *Ans. (d)*96. *Ans. (d)*97. *Ans. (d)*98. *Ans. (a)*99. *Ans. (c)*100. *Ans. (c)*101. *Ans. (a)*102. *Ans. (b)*103. *Ans. (d)*104. *Ans. (b)*105. *Ans. (a)*106. *Ans. (c)*107. *Ans. (d)*108. *Ans. (a)*109. *Ans. (c)*110. *Ans. (a)*111. *Ans. (c)*112. *Ans. (a)*

$$G = 100 \text{ GPa}$$

$$\mu = 0.25$$

$$E = 2G[1 + \mu]$$

$$= 2 \times 100 \times [1 + 0.25]$$

$$= 2 \times 100 \times 1.25$$

$$= 2.50 \times 100$$

$$= 250 \text{ GN/m}^2$$

$$E = 200 \text{ GN/m}^2$$

$$\mu = 0.25$$

$$E = 2G[1 + \mu]$$

$$G = \frac{E}{2[1 + \mu]} = \frac{200}{2 \times 1.25}$$

$$= 80 \text{ GN/m}^2$$