

THEORY & OBJECTIVE

# CONTROL SYSTEM

*By  
Team of  
Engineers Academy*

- State Engineering Services Examinations.
- Public Sector Examinations.
- JEn (SSC, DMRC & State Level).
- Other Technical Competitive Exams.



**ENGINEERS ACADEMY<sup>®</sup>**

**Your GATEway to Professional Excellence**

**IES • GATE • PSUs • JTO • IAS • NET**

**CORPORATE OFFICE**

100-102, Ram Nagar, Bambala Puliya, Tonk Road, Pratap Nagar, Jaipur-302033

**Ph.: + 91-8094441777**

**Website :** [www.engineersacademy.org](http://www.engineersacademy.org) | **Email:** [info@engineersacademy.org](mailto:info@engineersacademy.org)

Ajmer | Jaipur | Kota | Jodhpur | Bhilwara | Delhi | Patna | Lucknow | LPU | Ludhiana | Jalandhar | Kanpur | Allahabad

# CONTENTS

| S.No. | Topic                                | Page No. |
|-------|--------------------------------------|----------|
| 1.    | Introduction to Control System ..... | 1 – 12   |
| 2.    | Time Response Analysis.....          | 13 – 28  |
| 3.    | Routh Hurwitz Criterion .....        | 29 – 36  |
| 4.    | Root Locus .....                     | 37 – 44  |
| 5.    | Frequency Response .....             | 45 – 62  |
| 6.    | Compensation Techniques .....        | 63 – 74  |
|       | Summary .....                        | 75 – 77  |



## INTRODUCTION TO CONTROL SYSTEM

### THEORY

#### 1.1 INTRODUCTION

A control system is a combination of elements arranged in such manner that the working of each element produces the best output for a given input. Control systems are used in many applications such as for control of position, velocity, acceleration, temperature, pressure, voltage, current etc.

#### 1.2 TYPES OF CONTROL SYSTEMS

- (i) Open Loop
- (ii) Closed Loop

The table below gives a comparison between an open loop and a closed loop.

| Open Loop   | Closed Loop  |
|---|--|
| <p>1. An open loop control system is a system which does not have feedback arrangement (i.e. output has no effect on the control action).</p> <div style="text-align: center;"> </div> <p>2. The accuracy of this system depends on the calibration of the input.</p> <p>3. The open loop system is simple to construct and is cheap.</p> <p>4. Open loop systems are generally stable.</p> <p>5. The operation of this system degenerates due to the presence of non-linearity in its elements.</p> <p><i>Example:</i> Traffic light controller, electric washing machine.</p> | <p>1. In a close loop control system the output has an effect on control action through a feedback.</p> <div style="text-align: center;"> </div> <p>2. Due to feedback the performance of closed loop system is accurate.</p> <p>3. The closed loop system is complicated to construct and is costly.</p> <p>4. In closed loop system the stability depends on the system components.</p> <p>5. The performance is better as this system adjusts to the effect of non-linearity present in its elements.</p> <p><i>Example:</i> Automatic control systems, human beings.</p> |

### Feedback

Feedback is that characteristic of closed loop control system which distinguishes them from open loop system.

There are two type of feedback

- (a) Positive feedback
- (b) Negative feedback

Negative feedback system has following properties

- (i) Increased accuracy
- (ii) Reduced sensitivity
- (iii) Reduce effect of non linearity and distortion
- (iv) Increased bandwidth
- (v) Tendency towards instability

### ✂ Key Points :

- *Human being is a best example of a complex closed loop control system, in which,*
  - (i) *Human eyes acts as observer.*
  - (ii) *Human brain acts as controller.*
  - (iii) *Nervous system acts as connecting media.*

### Use of Laplace Transform in Control System

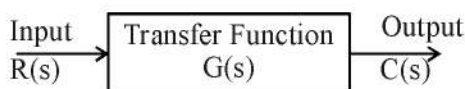
The control action of a dynamic control system is expressed in the form of differential equation in time domain. In order to calculate the solution from a differential equation in time domain it has to be transformed into an algebraic form. Laplace transform technique transforms a time domain differential equation into a frequency domain algebraic equation.

### ✂ Key Points :

- *Final value theorem is applicable if and only if  $\lim_{t \rightarrow \infty} f(t)$  exists (which means that  $f(t)$  settles down to a definite value at  $t \rightarrow \infty$ ).*
- *Final value theorem is not applicable for sine, cosine and ramp signal.*

## 1.3 TRANSFER FUNCTION

The transfer function of a linear time invariant system is the ratio of laplace transform of the output variable  $C(s)$  to the laplace transform of the input variable  $R(s)$  with all initial conditions zero. The block diagram of a simple transfer function is shown below



and the transfer function is given by the relation

i.e. 
$$G(s) = \frac{C(s)}{R(s)}$$

**Poles and Zeros of a Transfer Function**

The transfer function is represented by the ratio of two polynomials in terms of  $s$ .

i.e. 
$$G(s) = \frac{A(s)}{B(s)} = \frac{a_0s^n + a_1s^{n-1} + \dots + a_n}{b_0s^m + b_1s^{m-1} + \dots + b_m}$$

where,  $a_0, b_0, a_1, b_1, \dots$  are constants and depends on the system.

The above polynomial can be factorized into  $n$  and  $m$  terms of numerator and denominator respectively.

$$G(s) = \frac{k(s-s_1)(s-s_2)\dots(s-s_n)}{(s-s_a)(s-s_b)\dots(s-s_m)}$$

$$k = \frac{a_0}{b_0} \text{ is known as gain factor}$$

Following points about the transfer function should be noted

- Location of poles and zeros in  $s$  plane determines the stability of the system.
- Poles and zeros may be multiple of single. Multiple poles and zeros are avoided.
- In any practical system, number of poles are always greater than number of zeros.
- Numerator when equated to zero will give the zeros for the transfer function. At zero's frequency the response of the system is zero.
- Denominator when equated to zero will give the poles for the transfer function. At pole's frequency the response of the system is infinite.

**Advantages of Transfer Function**

- (i) Transfer function is used to analyse and design of linear, time invariant differential equation system.
- (ii) Transfer function is used to determine the time response, stability and accuracy of the system.
- (iii) Any physical system can be represented by its transfer function to study its properties.

**1.4 PICTORIAL REPRESENTATION OF CONTROL SYSTEM****Block Diagram**

It is a pictorial representation of a complex control system in which the transfer function of each element is represented by a block diagram in a proper sequence connected by lines which shows the flow of signals in the direction of arrows.

**Terms Related with Block Diagram****(i) Take off Point**

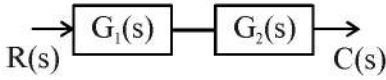
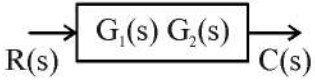
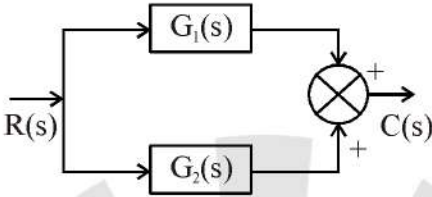
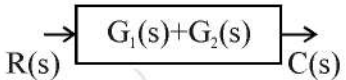
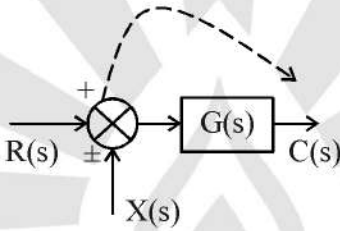
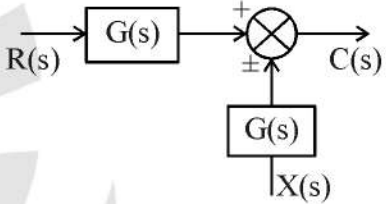
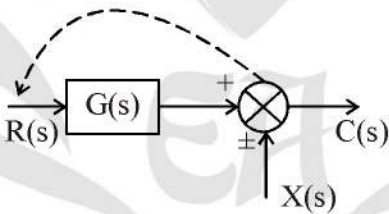
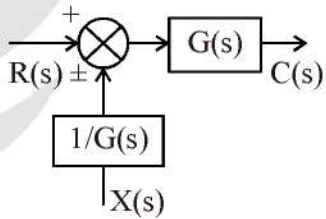
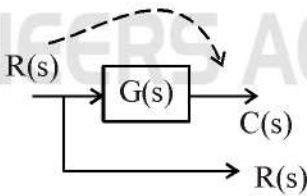
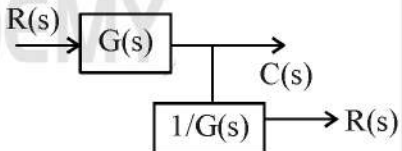
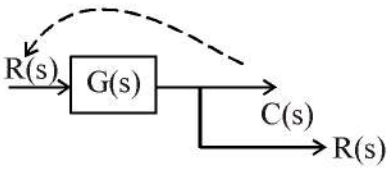
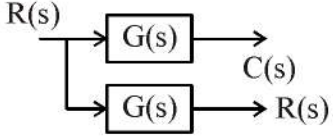
It is represented as a dot which signifies application of one input source to two or more systems.

**(ii) Summing Point**

It represents summation of two or more input signal entering in a system.

**Block Diagram Reduction**

In order to obtain the overall transfer function, complete block diagram configuration can be simplified by a procedure called block diagram reduction technique.

| Rule   | Original Diagram  | Equivalent Diagram  |
|--|---|---|
| 1. Combining block in cascade                                |    |    |
| 2. Combining block in parallel                               |    |    |
| 3. Moving a summing point before from block to after a block |   |   |
| 4. Moving a summing point ahead of a block                   |  |  |
| 5. Moving a take off point after a block                     |  |  |
| 6. Moving a take off point ahead of a block.                 |  |  |

| Rule  | Original Diagram | Equivalent Diagram |
|---|------------------|--------------------|
| 7. Shifting of a take off point from position before a summing point to after it. |                  |                    |
| 8. Shifting of a take off point after a summing point to before it.               |                  |                    |
| 9. Elimination of a feedback loop.  |                  |                    |

### 1.5 SIGNAL FLOW GRAPH

Signal flow graph further shortens the representation of a control system by way of eliminating the summing symbol, take off points and blocks. This elimination is achieved by replacing the variables by point called “Nodes” and the transfer function is termed as “Transmittance” which is replaced by a line called “branch”.

**(i) Node**

Node is a representation of variables in a signal flow graph.

**(ii) Branch**

A signal in the graph travels along the branch from one node to another in the direction indicated by arrow and multiplied by the transmittance.

**(iii) Loop**

It is a close path without repetition of any node.

**Rules for Drawing Signal Flow Graphs**

1. The signal travels along a branch in the direction of an arrow.
2. The input signal is multiplied by the transmittance to obtain the output signal.
3. Input signal at a node is the sum of all signals entering at that node.
4. A node transmits signals in all branches leaving that node.
5. Take off point after a summing point are represented by a single node.
6. Take off point precedes a summing point are represented by two separate nodes with a transmittance of unity between them.

In a signal flow graph the overall transmittance can be determined by “Mason’s gain formula” given by the following equation.

$$T = \sum_{k=1}^m \frac{P_k \Delta_k}{\Delta} s$$

Where,

$k$  = Total number of forward paths.

$P_k$  = Forward path transmittance of the path where no node is encountered more than once.

$\Delta_k$  = Path factor associated with  $k^{\text{th}}$  path involves all closed loops in the graph which are isolated from the forward path under consideration.

$\Delta$  = Graph determinant

=  $1 - [\text{sum of all individual loop transmittance}] + [\text{all possible pairs of non-touching loops}] - [\text{sum of loop transmittance products of all possible triplets of non-touching loops}] + [\dots\dots] - [\dots\dots]$

### Key Points :

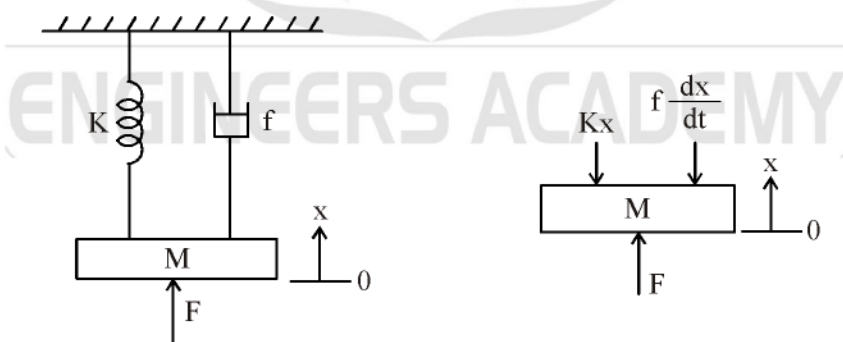
- While drawing signal flow graph from given block diagram representation, take off point after summing point is represented by a single node. Where as summing point preceding a take off point are represented by two different nodes.
- The path factor  $\Delta_k$  for the  $k^{\text{th}}$  path is equal to the value of the graph determinant of a signal flow graph which exists after removing the  $k^{\text{th}}$  path from the graph.

## 1.6 MODELLING OF CONTROL SYSTEM

In this section, we deal with some physical systems, analyze their performance and then determines their transfer function by drawing block diagram. This process is called as modelling of control system.

### 1.6.1 Translation Mechanical System

Let us consider a translational spring-mass-damper system such as shown in figure below in which force is applied in the upward direction. Then this force is distributed on all the three elements of the mass-spring damper system.



The force  $F$  is applied on mass  $M$  (unit is Kg) results into displacement  $X$ . If the spring deflection constant is  $K$  (Newton/metre) and friction coefficient is  $f$  (Newton/rad/sec), then equation of motion for the system is obtained by applying second law of translation motion.

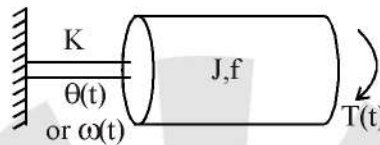
$$F = M \frac{d^2x}{dt} + f \frac{dx}{dt} + Kx \quad \dots(i)$$

Now, the transfer function of the system with initial conditions zero is given by

$$G(s) = \frac{X(s)}{F(s)} = \frac{1}{Ms^2 + fs + K}$$

### 1.6.2 Rotational Mechanical System

Here we apply torque  $T(t)$  (in N-m), which is analogous to force in translation system. In place of mass we take moment of inertia  $J$  (in  $\text{kg-m}^2$ ). Coefficient of viscous friction remains same as before i.e.  $f$  (in N-m/rad/sec)  $K$  is known as torsional constant here. In the similar way we write the equation for rotational mechanical system.



$$T(t) = J \frac{d^2\theta}{dt^2} + f \frac{d\theta}{dt} + K\theta$$

where  $\theta$  = angular displacement in radians  
and transfer function is given by

$$\frac{\theta(s)}{T(s)} = \frac{1}{(Js^2 + fs + K)}$$

If we take the output quantity in terms of angular velocity of shaft  $\omega(t)$  in rad/sec, then

$$\omega(t) = \frac{d\theta}{dt} \text{ or } \omega(s) = s\theta(s)$$

$$\therefore \frac{\omega(s)}{T(s)} = \frac{s}{Js^2 + fs + K}$$

Normally for rotational system,  $K = 0$  then transfer function is given by

$$\frac{\theta(s)}{T(s)} = \frac{1}{Js^2 + fs}$$

or

$$\frac{\omega(s)}{T(s)} = \frac{1}{Js + f}$$

### 1.6.3 Force-Voltage Analogy

- Force  $f(t)$  is analogous to voltage  $v(t)$ .
- Displacement  $x(t)$  is analogous to charge  $q(t)$ .
- Mass  $M$  is analogous to  $L$ .
- Coefficient of viscous friction  $f$  is analogous to  $R$ .
- Spring constant  $K$  is analogous to  $\frac{1}{C}$ .

### 1.6.4 Force Current Analogy

- Force  $f(t)$  is analogous to current  $i(t)$ .
- Displacement  $x(t)$  is analogous to flux  $\psi$ .
- Mass  $M$  is analogous to capacitance  $C$ .
- Coefficient of viscous friction  $f$  is analogous to  $\frac{1}{R}$ .
- Spring constant  $K$  is analogous to  $\frac{1}{L}$ .

### Analogy with Various Systems

| Electrical  | Thermal                                     | Mechanical                     | Liquid system<br>(Hydraulic)                          | Pneumatic<br>(air)                                       |
|-------------|---|--------------------------------|---|--|
| Charge      | Heat (joules)                               | Length (meter)                 | Volume of water<br>flow (meter) <sup>3</sup>          | Volume of air flow<br>(meter) <sup>3</sup>               |
| Voltage     | Temperature (°C)                            | Force (Newton)                 | Head (meter)  | Difference of<br>pressure (Newton/m <sup>2</sup> )       |
| Current     | Heat flow rate<br>(joule/sec)               | Velocity (meter/sec)           | Liquid flow rate<br>(m <sup>3</sup> /sec)             | Air flow rate<br>(meter <sup>3</sup> /sec)               |
| Resistance  | Resistance<br>(°C-sec/joules)               | Resistance<br>Newton/sec/meter | Resistance<br>(sec/m <sup>2</sup> )                   | Resistance<br>(Newton-sec/m <sup>5</sup> )               |
| Capacitance | Capacitance<br>(joule/°C)                   | Capacitance<br>(meter/Newton)  | Capacitance<br>(meter <sup>2</sup> )                  | Capacitance<br>(m <sup>5</sup> /Newton)                  |
| Inductance  | Inductance<br>(°C-sec <sup>2</sup> /joules) | Mass<br>(kg.)                  | Inductance<br>(sec <sup>2</sup> /meter <sup>2</sup> ) | Inductance<br>(Newton-sec <sup>2</sup> /m <sup>5</sup> ) |

### Analogy between Electrical and Mechanical System

| Force - voltage                            | Force - current | Mechanical translatory<br>system | Mechanical rotational<br>system                |
|--|-----------------|----------------------------------|--|
| Voltage $v(t)$                             | Current         | Force $f(t)$                     | Torque $T(t)$                                  |
| Charge $q(t)$                              | flux            | Displacement $x(t)$              | Angular displacement $\theta(t)$               |
| Current $i(t)$                             | voltage         | Velocity $v(t) = \dot{x}(t)$     | Angular velocity $\omega(t) = \dot{\theta}(t)$ |
| Inductance $L$                             | $C$             | Mass $M$                         | Moment of Inertia $J$                          |
| Resistance $R$                             | $\frac{1}{R}$   | Friction coefficient $f$         | Friction coefficient $f$                       |
| Reciprocal<br>of capacitance $\frac{1}{C}$ | $\frac{1}{L}$   | Spring constant $K$              | Torsional constant $K$                         |



## PRACTICE SHEET

### OBJECTIVE QUESTIONS

1. The Laplace transformation of  $f(t)$  is  $F(s)$ .

Given  $F(s) = \frac{\omega}{s^2 + \omega^2}$  the final value of  $f(t)$  is

- (a) infinity
- (b) zero
- (c) one
- (d) None of these

2. Signal flow graph is used to find

- (a) stability of the system
- (b) controllability of the system
- (c) transfer function of the system
- (d) poles of the system

3. The transfer function of a linear system is the

- (a) ratio of the output  $V_o(t)$ , and input,  $V_i(t)$
- (b) ratio of the derivatives of the output and the input
- (c) ratio of the Laplace transform of the output and that of the input with all initial conditions zeros
- (d) none of these

4. Non-minimum phase transfer function is defined as the transfer function

- (a) which has some zeros in the right-half s-plane
- (b) which has zeros only in the left-half s-plane
- (c) which has poles or zeros in right half of s-plane
- (d) which has poles in the right-half s-plane.

5. As compared to a closed-loop system an open-loop system is

- (a) more stable as well as more accurate
- (b) less stable as well less accurate
- (c) more stable but less accurate
- (d) less stable but more accurate

6. In regenerative feedback the transfer function given by

(a)  $\frac{C(s)}{R(s)} = \frac{G(s)}{1 + G(s)H(s)}$

(b)  $\frac{C(s)}{R(s)} = \frac{G(s)H(s)}{1 - G(s)H(s)}$

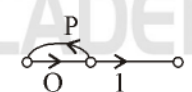
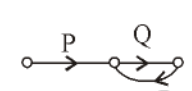
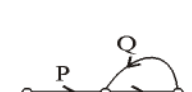
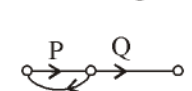
(c)  $\frac{C(s)}{R(s)} = \frac{G(s)H(s)}{1 + G(s)H(s)}$

(d)  $\frac{C(s)}{R(s)} = \frac{G(s)}{1 - G(s)H(s)}$

7. Which of the following is not valid in case of signal flow graph?

- (a) In signal flow graph signals travel along branches only in the marked direction.
- (b) Nodes are arranged from right to left in a sequence.
- (c) Signal flow graph is applicable to linear systems only.
- (d) For signal flow graph, the algebraic equations must be in the form of cause and effect relationship.

8. Match List-I (Signal flow graph) with List-II (Transfer function) and select the correct answer using the codes given below the lists.

| List-I  | List-II               |
|---|-----------------------|
| A.  | 1. $\frac{P}{1-Q}$    |
| B.  | 2. $\frac{Q}{1-PQ}$   |
| C.  | 3. $\frac{PQ}{1-PQ}$  |
| D.  | 4. $\frac{PQ}{1-P^2}$ |

Codes :    **A**    **B**    **C**    **D**

- (a) 2    3    4    1
- (b) 2    3    1    4
- (c) 3    2    1    4
- (d) 3    2    4    1

9. Type of a system depends on the
- (a) number of its poles
  - (b) difference between the number of poles and zeros
  - (c) number of its real poles only
  - (d) number of poles it has at the origin

10. The final value of function

$$F(s) = \frac{5}{s(s^2 + s + 2)}$$

is equal to

- (a) zero
- (b)  $\frac{2}{5}$
- (c)  $\frac{5}{2}$
- (d) 5

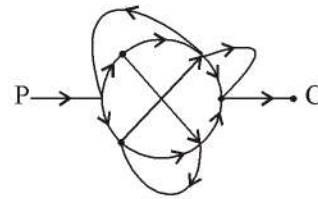
11. When the signal flow graph is as shown in the figure. the overall transfer function of the system will be



- (a)  $\frac{C}{R} = G$
- (b)  $\frac{C}{R} = \frac{G}{1 - H_2}$
- (c)  $\frac{C}{R} = \frac{G}{(1 + H_1)(1 + H_2)}$
- (d)  $\frac{C}{R} = \frac{G}{1 - H_1 - H_2}$

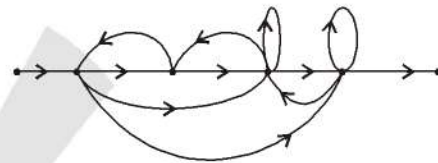
12. The transfer function of a system is used to study its
- (a) transient behaviour
  - (b) steady state behaviour
  - (c) transient and steady state behaviour
  - (d) None of these

13. The number of forward paths in the signal flows diagram shown below are



- (a) 2
- (b) 3
- (c) 6
- (d) 5

14. The number of forward paths and individual loops in the signal flow diagram given below are



- (a) 3, 7
- (b) 4, 8
- (c) 5, 6
- (d) 5, 7

15. The main drawback of feedback system may be
- (a) inaccuracy
  - (b) inefficiency
  - (c) insensitivity
  - (d) instability

16. The time constant of an open loop control system is

- (a) equals to the time constant of a closed loop control system
- (b) Half the time constant of a closed loop transfer function.
- (c) double the time constant of a closed loop control system.
- (d) has no relation with closed loop control system's time constant.

17. If the unit step response of a system is a unit impulse function, then the transfer function of such a system will be

- (a) 1
- (b)  $\frac{1}{s}$
- (c) s
- (d)  $\frac{1}{s^2}$

18. Bandwidth is used as means of specifying performance of a control system related to

- (a) relative stability of the system
- (b) the speed of response
- (c) the constant gain
- (d) All of these

19. The transient response of a control system is mainly due to
- (a) internal forces (b) inertia forces  
(c) friction (d) stored energy
20. In pneumatic system pressure is considered as analogous to
- (a) charge (b) current  
(c) voltage (d) resistance
21. Which of the following quantities under mechanical rotational system and electrical system are not analogous?
- (a) Angular displacement-charge  
(b) Angular velocity-current  
(c) Moment of inertia-conductance  
(d) Viscous friction coefficient-resistance
22. When analogy is drawn between electrical system and thermal systems, current is considered analogous to
- (a) heat flow rate  
(b) temperature  
(c) reciprocal of temperature  
(d) heat flow
23. In force-current analogy, capacitance is analogous to
- (a) mass (b) velocity  
(c) displacement (d) momentum
24. Under analogy of electrical and thermal system, the resistance under thermal quantities is expressed in terms of
- (a) °C (b)  $\frac{C \times \text{min}}{\text{joule}}$   
(c)  $\frac{^\circ\text{C}}{\text{joule min}}$  (d)  $\frac{\text{min}}{\text{joule}^\circ\text{C}}$

○○○



ENGINEERS ACADEMY